

Is it allowed to enter the area marked with this sign when making a right turn?



1. Allowed
2. Prohibited
3. Allowed if the lane is not separated from the rest of the road by a solid marking line.

Ans.'3

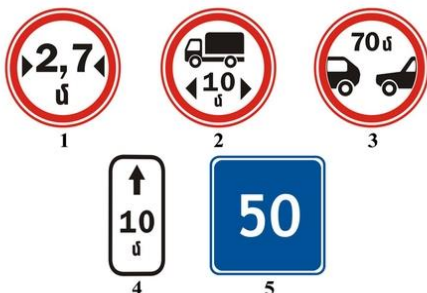
This road sign shows:



1. Road section where there is a sidewalk or pedestrian path.
2. Road section where there is a pedestrian crossing.
3. Road section where there is no sidewalk or pedestrian path.

Ans.'2

Which of the following signs prohibits traffic with a smaller space than the one shown on the sign?



- 1.1
- 2.2
- 3.3
- 4.4
- 5.5

Ans.'3

At what distance from the location of the dangerous part of the road are these signs placed in the settlements?



1. 15 - 25 m:
2. 25 - 50 m:
3. 50 - 100 m:
4. 100 - 150 m:
5. 150 - 300 m:

Ans.'3


This road sign:



1. Prohibits the movement of all mechanical vehicles, except for two-wheeled motorcycles without a side attachment.
2. The traffic of all vehicles is prohibited, except for wheeled tractors.
3. Traffic of tractors and self-propelled vehicles is prohibited.


Ans.'3

Which of the following signs obliges to give way to vehicles entering or approaching a narrow section of the road in the opposite direction?



- 1.1
- 2.2
- 3.3
- 4.4
- 5.5

Which of the following signs warns of approaching an intersection of equal roads?



- 1.1
- 2.2
- 3.3
- 4.4
- 5.5

Ans.'5


Which of the following signs is placed just before crossing the traffic area?



- 1.1
- 2.2
- 3.3
- 4.4
- 5.5

Ans.'2

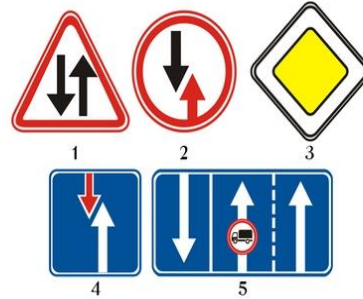
These signs allow traffic:



- 1. Left only.
- 2. Straight ahead only.
- 3. Right only.
- 4. Straight ahead, to the right, and in the opposite direction.

Ans.'4

Which sign gives the driver an advantage over oncoming vehicles?



- 1.1
- 2.2
- 3.3
- 4.4
- 5.5

Ans.'4

What does the sign under the sign mean?



- 1. The distance from the sign to the beginning of the first turn.
- 2. The distance from the first turn to the beginning of the second turn.
- 3. The length of the road section with dangerous turns.

Ans.'3

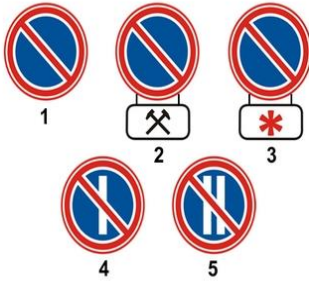
What do the following signs mean?



- 1. Motorcycle traffic to the right is prohibited.
- 2. Motorcycle traffic to the right is prohibited.

Ans.'1

Which of the following signs prohibits parking on even days of the month?



- 1.1
- 2.2
- 3.3
- 4.4
- 5.5

Ans.'5

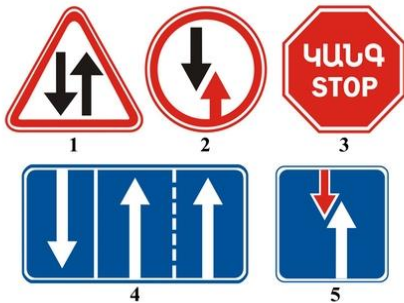
This road sign:



- 1. Allows to drive only at the specified speed or higher.
- 2. It is forbidden to drive at a higher speed than indicated on the sign.
- 3. Indicates the speed at which it is proposed to drive on a given section of road.

Ans.'1

Which of the following signs obliges you to give way to oncoming vehicles?



- 1.1
- 2.2
- 3.3
- 4.4
- 5.5

Ans.'2


This sign is called:



- 1. Pre-designated obstacle avoidance sign.
- 2. Pre-indicator to change lane.
- 3. Pre-indicator for entering the oncoming traffic lane.

Ans.'2

What sign requires you to give way to vehicles traveling on an intersecting road?



- 1.1
- 2.2
- 3.3
- 4.4
- 5.5

Ans.'3


Is the bus driver allowed to overtake in the zone of this sign?



- 1. Allowed in all cases in compliance with the rules of overtaking.
- 2. Not allowed
- 3. Allowed if the vehicle overtaken is moving at a speed of less than 30 km/h.

Ans.'1

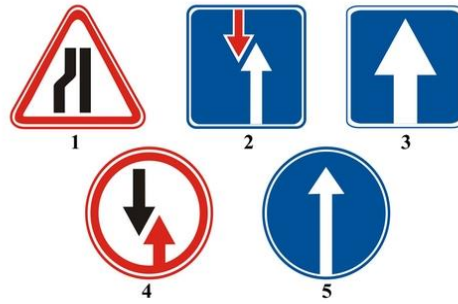
Which sign allows driving only at the speed indicated (km/h) or higher?



- 1.1
- 2.2
- 3.3
- 4.4
- 5.5

Ans.'3

Which sign indicates a road segment with one-way traffic?



- 1.1
- 2.2
- 3.3
- 4.4
- 5.5

Ans.'3

What does the sign below the sign indicate?



- 1.The length of the narrow section of road.
- 2.Distance from the sign to the point of restriction
- 3. Distance to the detour of the narrow road section.

Ans.'2

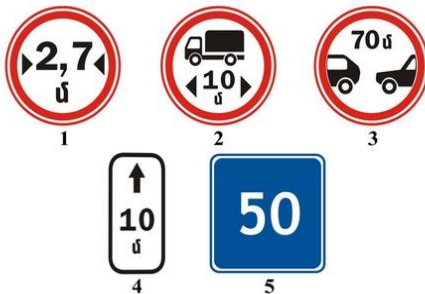
This road sign warns that ahead there is:



- 1.A section of road with a water barrier that does not have a bridge or ferry crossing.
- 2.A section of the road with a water barrier, where there is a drawbridge.
- 3.A place where the road comes out on an embankment or shore.

Ans.'3

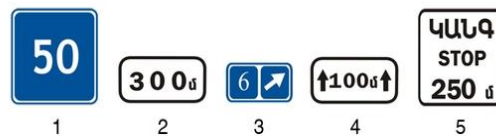
Which sign indicates the zone of road signs prohibiting stopping and parking of vehicles?



- 1.1
- 2.2
- 3.3
- 4.4
- 5.5

Ans.'4

Which sign indicates the length of the dangerous section of road marked with warning signs?



- 1.1
- 2.2
- 3.3
- 4.4
- 5.5

Ans.'4


This road sign indicates:



1. A one-way road where only trucks are allowed.
2. A lane designated for the movement of trucks only.
3. The recommended direction of travel for trucks.

Ans.'3

Which sign means "Hotel" or "Motel" ?



- 1.1
- 2.2
- 3.3
- 4.4
- 5.5

Ans.'3

This identification marking is used to identify vehicles:



1. Carrying dangerous goods.
2. Vehicles driven by persons with disabilities.
3. Driven by deaf-mute or deaf-blind drivers.
4. Driven by drivers with up to 3 years of driving experience.

Ans.'3

Which sign marks the end of the 50 km/h maximum speed limit zone?



- 1.1
- 2.2
- 3.3
- 4.4
- 5.5

Ans.'2


What the sign and the sign below it warns you about:



1. Stopping on the side of the road is prohibited due to work.
2. Pulling off the roadside is dangerous due to road repair work.
3. Standing on the roadside is prohibited due to road repairs.

Ans.'2

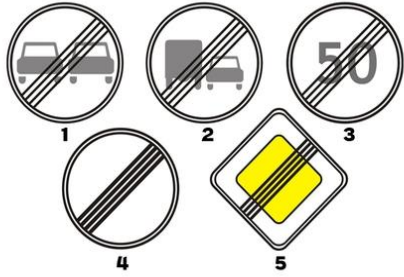
This identification mark is used to identify a vehicle:



1. Driven by a disabled person.
2. Carrying heavy and oversized cargoes.
3. Carrying dangerous goods.
4. Driven by a deaf-mute or deaf driver.

Ans.'3

Which of the following signs cancels all previously imposed restrictions?



- 1.1
- 2.2
- 3.3
- 4.4
- 5.5

Ans.'4


In what case did the driver correctly comply with the requirements of this sign?



- 1. Gave way to mechanical vehicles moving on the crossing road.
- 2. Gave way to vehicles moving on an intersecting road.

Ans.'2

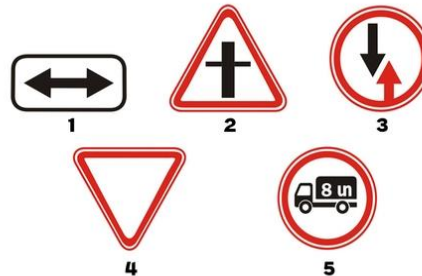
Which of the following signs is set to indicate a road train?



- 1. Left sign.
- 2. Right sign.
- 3. Both signs.

Ans.'2

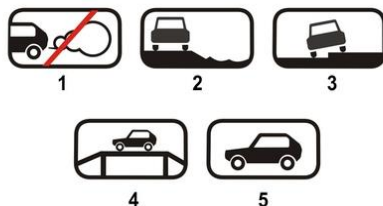
What sign requires you to give way to vehicles traveling on an intersecting road?



- 1.1
- 2.2
- 3.3
- 4.4
- 5.5

Ans.'4

What sign (placard) indicates the method of parking a vehicle?



- 1.1
- 2.2
- 3.3
- 4.4
- 5.5

Ans.'3

Is it allowed to stop in the passenger boarding lane marked with this sign?



- 1. Allowed if the lane is located at the right edge of the traffic area and if it is not separated from the rest of the traffic area by a solid line of markings.
- 2. Prohibited
- 3. Allowed

Ans.'1

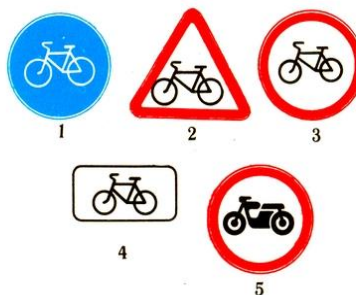
In the presence of this road sign:



1. Overtaking is prohibited by all types of vehicles, with the exception of slow-moving vehicles, animal-drawn carts, motorcycles without a side trailer, mopeds and bicycles.
2. Overtaking by trucks with a maximum permissible weight not exceeding 3.5 tons is allowed.
3. Overtaking is allowed if the speed of the overtaken vehicle does not exceed 30 km/h.

Ans.'1

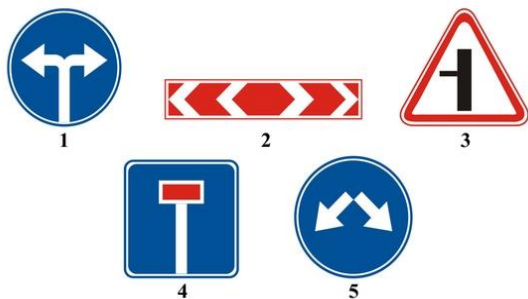
What sign is called "Intersection with a bicycle lane" ?



- 1.1
- 2.2
- 3.3
- 4.4
- 5.5

Ans.'2

Which sign indicates the direction of travel at a T-junction?



- 1.1
- 2.2
- 3.3
- 4.4
- 5.5

Ans.'2

This road sign indicates:



1. A road that has no thoroughfare
2. The direction of travel to a facility in a populated area.
3. The end of an extra lane on an uphill or acceleration lane (slip lane).

Ans.'1

Which sign does not apply to public vehicles?



- 1.1
- 2.2
- 3.3
- 4.4
- 5.5

Ans.'4

Which vehicles are allowed to drive on the road on which this sign is placed?



1. Mechanical vehicles
2. All vehicles.
3. Buses and motorcycles
4. Vehicles with a maximum speed of more than 40 km/h.

Ans.'3

Which of these road signs is not a prohibition sign?



- 1.1
- 2.2
- 3.3
- 4.4
- 5.5

Ans.'2

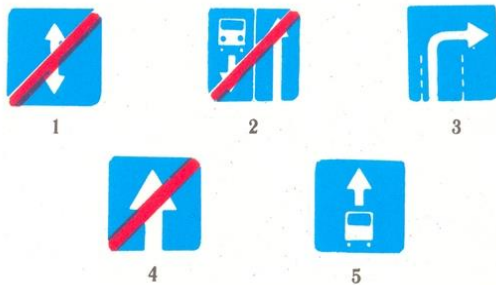
What does this identification mark mean?



- 1. There is a section of road ahead that has a bump in the roadway.
- 2. Ahead is a section of road with three lanes for traffic in that direction.
- 3. Mechanical vehicle is equipped with tires with spikes.

Ans.'3


Which of these signs is called "End of one-way road"?



- 1.1
- 2.2
- 3.3
- 4.4
- 5.5

Ans.'4

What sign requires you to give way to vehicles traveling on an intersecting road?



- 1.1
- 2.2
- 3.3
- 4.4
- 5.5

Ans.'2

These signs indicate:



- 1. Parking place in 30 m for vehicles with the identification sign "Disabled".
- 2. Parking space in the area of 30 m for vehicles, except for motorized wheelchairs.
- 3. Parking space within 30 m for motorized wheelchairs and vehicles with the disabled identification sign.

Ans.'3

Which of these signs is a vehicle identification sign?



- 1.1
- 2.2
- 3.3

Ans.'3



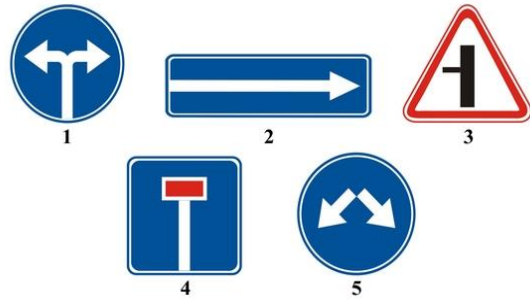
What vehicles are prohibited by this road sign?



1. Mechanical vehicles
2. Only motor vehicles
3. All passenger cars.

Ans.'1

Which sign indicates bypass road to the right or left?



- 1.1
- 2.2
- 3.3
- 4.4
- 5.5

Ans.'5

Which sign is placed at the front and rear of a vehicle carrying a group of children?



- 1.1.
- 2.2.
- 3.3.
- 4.4.

Ans.'1

What do these road signs show?



1. The highway continues from the intersection to the left.
2. The highway continues straight through intersection and to the left

Ans.'1


What do these road signs show?



1. In the area covered by the sign, drivers must travel at a higher speed than that indicated on the sign.
2. In the zone of the sign, drivers are advised to drive at the speed indicated by the sign.

Ans.'2


Which signs apply only for the period of time when the roadway pavement is wet?



1. Only A and C.
2. Only B.
3. Only C.
4. All.

Ans.'3

What should the driver do in this situation?



- 1.Continue driving in a straight line.
- 2.Change to the oncoming traffic lane.

Ans.'2

What do these road signs show?



- 1.In 150-300m after the sign there is a narrowing of the road on the right side of 100m.
- 2.100m after the sign the narrowing of the road on the right side begins.

Ans.'1

In which direction the driver is allowed to drive:



- 1.Right and left only.
- 2.Straight ahead only.
- 3.Straight and in the opposite direction.

Ans.'3

What do these road signs show?



- 1.Parking is forbidden on Saturdays.
- 2.Parking is forbidden on Sundays.
- 3.Parking is forbidden on weekends and holidays.
- 4.Parking is prohibited during snowfall.

Ans.'3

Which sign prohibits a U-turn?



- 1.1.
- 2.2.
- 3.3

Ans.'3

What do these road signs show?



- 1.Pulling off to the side of the road is dangerous due to repair work.
- 2.Repair work is being carried out on the road.

Ans.'1


What should a driver do when this road sign is placed in front of an intersection?



1. Drive through the intersection observing the safety rules.
2. Give way to vehicles moving on the crossing road.
3. Stop before the sign and give way to vehicles moving on the crossing road.

Ans.'3

Which signs do not apply to public vehicles?



1. None.
2. Only the first one.
3. Only the fourth one.

Ans.'3

This road sign shows that ?



1. At an intersection one should go to the left or right.
2. There is reversible traffic on the road to be crossed.
3. One-way traffic is organized on the crossed road.

Ans.'2

Is the driver in this situation obliged to give way to a truck?



1. Obligated.
2. Not obliged.

Ans.'1

What do these road signs show?



1. Drivers must travel at 40km/h in icy conditions.
2. Drivers should drive at a maximum speed of 40km/h when the road surface is wet.

Ans.'2

What do these road signs show?



1. Parking is prohibited on Saturdays.
2. Parking is prohibited on Sundays.
3. Parking is prohibited on working days.

Ans.'3

What does this road sign show?



- 1.1. Traffic on this section of the road is allowed at a speed of no more than 50 km/h.
2. It is recommended to drive on this road section at a speed of 50 km/h.
3. The traffic is only allowed at the speed indicated on the sign or more.

Ans.'2

Which traffic sign forces the driver to go only to the left or to the right?



1                      2                      3

- 1.1
- 2.2
- 3.3

Ans.'3

What do these road signs show?



1. When the road surface is wet, it is recommended to drive at 40 km/h.
2. When the road surface is wet, it is recommended to drive at a maximum speed of 40 km/h.

Ans.'1

These road signs apply to:



1. On the left side of the road.
2. On the right side of the road.
3. The side of the road where they are installed.

Ans.'3

What trajectory is allowed to bypass an obstacle in this situation?



1. Only "a".
2. Only "b".
3. "a" and "b"

Ans.'3

What should the driver do in this situation?



1. It is necessary to stop near the first sign.
2. It is necessary to stop before the second sign.
3. It is necessary to stop at a distance of at least 5 meters from the first railway line.

Ans.'2

What should a driver do if he / she intends to make a right turn at an intersection?



- 1.Can move to the right lane and then make a turn.
- 2.Can approach an intersection, then make a right turn.
- 3.Both answers are correct.

Ans.'3

Does the driver have the right to make a U-turn at a distance of 200 meters from the sign in this situation?



- 1.Has the right.
- 2.Has no right.

Ans.'1

Is the driver obliged to stop at the place indicated by the traffic controller in this situation?



1. Not Obligated because the sign prohibits stopping.
2. Obligated

Ans.'2

What should the driver do in this situation?



1. Drive through the railway crossing, observing safety measures.
2. Drive through the railway crossing without stopping.
3. Stop before the sign and safely pass the railroad crossing.

Ans.'3

What does this road marking indicate on the roadway?



1. Boundaries of separate zones for vehicles traveling in the same direction.
2. Boundaries of the traffic area lanes with reversing traffic.

Ans.'2

In which direction is a passenger car allowed to drive?



1. To the left and in the opposite direction.
2. In any direction.
3. Straight, left and opposite direction.

Ans.'3

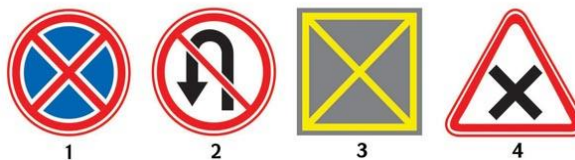
What should the driver do in this situation?



- 1.If necessary, give way to a vehicle moving on an intersecting road.
- 2.Stop and give way to a vehicle moving on the crossing road.

Ans.'2

Which of the following road signs prohibits entering the intersection area if there is a traffic jam ahead, except when turning left or right?



- 1.1
- 2.2
- 3.3
- 4.4

Ans.'3

At what maximum distance is the "intersection area" road sign placed at complex intersections if it is not possible to place it at the intersection border?



- 1.10 m.
- 2.20 m.
- 3.30 m.

Ans.'3


What does the following road sign warn about?



- 1.Stopping is prohibited.
- 2.It is prohibited to enter the area of the intersection if there is a traffic jam in the direction of traffic, which will force the driver to stop.
- 3.It is prohibited to enter the area of the intersection if there is a traffic jam in the direction of traffic.

Ans.'2

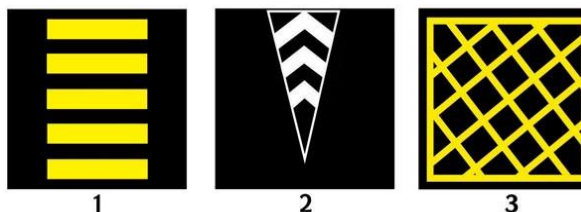
What does the following road mark indicate?



- 1.Parking place for vehicles.
- 2.Pedestrian crossing.
- 3.Security Island.
- 4.It is prohibited to enter the intersection if there is a traffic jam in the direction of the traffic, which will force the driver to stop.

Ans.'4

Which of the following road markings indicates the part of the intersection where entry is prohibited if there is a traffic jam in the direction of the traffic, which will force the driver to stop?



- 1.1
- 2.2
- 3.3

Ans.'3

Reversing from the specified area is



1. Allowed
2. Prohibited.

Ans. 2

Do you have to stop in front of the "Stop Line"?



1. Yes
2. No

Ans. 2

In this situation



1. We must give way to the truck driver
2. We can cross the narrow section first

Ans. 2

After these signs, the maximum speed for a truck driver with a maximum weight not exceeding 3.5 tons is set.



1. 60 km / h
2. 70 km / h
3. 80 km / h

Ans. 3

Parking at the specified location is



1. Allowed
2. Allowed only during daylight hours
3. Prohibited

Ans. 1

Did the truck driver violated the parking rules?



1. Yes
2. Yes, if the maximum permissible mass exceeds 3.5 tons
3. No

Ans. 1

In what direction is the traffic allowed?



1. Only straight
2. Straight and opposite
3. In all directions

Ans. 2

What does the additional information sign indicate?



1. the distance from the sign to the intersection when the "Give way" sign is placed just before the intersection
2. the distance from the sign to the intersection, when the sign "No traffic without stopping" is placed immediately before the intersection
3. Location of the border checkpoint

Ans. 2

Stopping at the specified place is



1. Allowed
2. Prohibited

Ans. 1

What speed mode is set by these signs on the road?



1. The minimum speed is 50 km / h
2. Recommended speed - 50 km / h
3. Minimum speed simultaneously in the left lane - 50 km / h

Ans. 3

Is the driver allowed to make a left turn?



1. Yes
2. No

Ans. 1

Signs indicate that:



1. There is a danger of pedestrians crossing the 150-meter section of the road
2. There will be an unregulated pedestrian crossing from 150 meters

Ans. 2



In what direction can you continue driving at this intersection if you are driving a truck with a maximum permissible weight of 3.5 tons?



1. Only left
2. Right, left or opposite
3. Any

Ans.'3

Is a right turn to a paved road allowed?



1. Yes
2. No

Ans.'1

Is it allowed to make a stop at a designated place?



1. Yes
2. No

Ans.'1

This road sign



1. Warns of approaching a narrow section
2. Prohibits to cross the bridge
3. Obliges to give way to the oncoming driver in narrow sections

Ans.'3

What will you do if you need to change the direction of movement in the opposite direction?



1. You will reverse at this intersection
2. You will reverse after crossing the intersection straightly
3. Both options are allowed.

Ans.'2


Parking at the specified location is



1. Allowed
2. Prohibited

Ans.'2

In the case of this sign, the effect of the sign used with it relates to



1. Only passenger cars
2. Passenger cars, as well as trucks with a maximum permissible weight of up to 3.5 tons
3. Passenger cars and motorcycles

Ans.'2

This road sign indicates



1. Parking at the roadside is prohibited
2. Going onto the roadside is dangerous due to repair work
3. Parking is allowed only on the traffic area

Ans.'2

In which directions is traffic allowed from the mentioned zone?



1. Only left
2. Straight and left
3. Straight, left and opposite

Ans.'3

This road sign



1. Offers to travel at a speed of 40 km / h
2. Allows to travel at speeds of only 40 km / h or higher
3. Prohibits to travel at a speed higher than 40 km / h

Ans.'3

Which yard is the driver allowed to enter?



1. Left
2. Right
3. No yard can be entered
4. Both yards are allowed

Ans.'2

What does the road sign warn about?



1. Approaching a slippery road section
2. Approaching a wet road section
3. Road section where gravel emission from wheels is possible

Ans.'3

In what direction is a passenger driver allowed to drive in this situation?



1. Only straight
2. Straight and the right
3. Any

Ans.'3

Unloading the vehicle in the affected area of this road sign is



1. Allowed if it lasts up to 5 minutes
2. Allowed regardless of the time
3. Prohibited

Ans.'2

Is it allowed to enter the mentioned yard?



1. Yes
2. No

Ans.'1

In this situation stopping to pick up a passenger is



1. Allowed after the sign
2. Allowed before the sign
3. Prohibited in both cases

Ans.'3

In this case, at least how long can an equal intersection appear?



1. 100 meters
2. 150 meters
3. 50 meters

Ans.'3

From where do the traffic rules start across the residence?

1. Only after the signs of the start of the residence in white
2. Only after the white or blue signs with the name of the place of residence
3. Only after starting the construction area

Ans.'1

This road sign



1. Warns about crossing with tram lines
2. About approaching the tram stop
3. Obliges to give way to the tram driver

Ans.'1

These signs oblige you to keep distance from the car in front



1. Less than 70 meters to 900 meters
2. More than 70 meters to 900 meters
3. 70 meters after 900 meters.

Ans.'2

In which direction can you continue the driving from the mentioned zone?



1. Only straight
2. Left and straight
3. Left, straight and reverse

Ans.'2

These signs warn



1. About approaching the three-lane railway crossing
2. From a distance of 150-300 m there will be a railway crossing without a barrier
3. After 50-100 meters there is a railway crossing

Ans.'2

Is parking allowed in the area?



1. Yes
2. Allowed only to residents of the specified area
3. No

Ans.'1

In what direction can you continue driving at the mentioned intersection, if you are driving a truck with a maximum permissible weight of 3 tons?



1. Only straight
2. Only straight and right
3. Any

Ans.'3

An audible signal can be used in this situation



1. Only for warning about overtaking
2. Only to prevent a traffic accident
3. In both cases.

Ans.'2

Is it allowed to overtake in this situation?



1. Yes
2. Yes, if the speed of the motorcycle is less than 30 km / h
3. No

Ans.'1

Did the truck driver violate the parking rules?



1. No
2. Yes, if the maximum permissible mass is greater than 3.5 tons
3. Yes

Ans.'3

Is it possible to park in the mentioned place on odd days of the month?



1. Yes
2. Yes, after 19:00
3. No

Ans.'2

Are you allowed to approach the workplace in the area affected by these signs?



1. Allowed only on working days
2. Allowed only on non-working days
3. Allowed on all days
4. Prohibited

Ans.'3

Is a trailer passenger car allowed in a straight line at this intersection?



1. Yes
2. Only residents of that area are allowed
3. No

Ans.'1

This sign



1. Shows the directions of movement at the intersection
2. Prohibits traffic at an intersection

Ans.'1

At what distance will the slippery road section start in the settlement?



1. At least 100 meters
2. At least 50 meters
3. Immediately after the sign

Ans.'2

Which vehicles are not affected by the stop sign in this case?



1. Passenger taxis
2. Only on motorcycles and cars equipped with the "Disabled" identification mark
3. All the signs

Ans.'2

Which driver violated the parking rules?



1. None
2. Truck driver
3. Motorcycle and passenger drivers

Ans.'1

Reversing on the indicated track is



1. Allowed
2. Prohibited

Ans.'2

Parking after the overpass bridge is



1. Allowed
2. Prohibited

Ans.'2

These road signs inform



1. About the construction of a railway crossing
2. About approaching the railway crossing with a barrier
3. On a railroad crossing without a barrier

Ans.'2

When traveling through the mentioned zone, traffic is allowed



1. Only left
2. Only straight
3. Left and reverse

Ans.'3

This sign indicates the approach of such a tunnel



1. Where there are no markings
2. Where there is no artificial lighting

Ans.'2

This sign informs in advance



1. About the need to give in to the cyclist
2. About crossing the bike path
3. About approaching the bicycle square.

Ans.'2

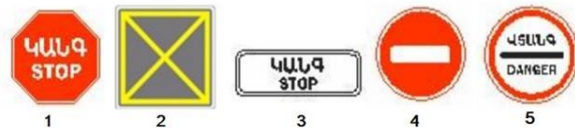
Which vehicle drivers are affected by the signs?



1. Passenger cars and motorcycles
2. All
3. Only passenger cars

Ans.'1

In which case, after stopping, the movement can not be resumed without permission?



1. Only 2
2. 1 and 5
3. Only 5
4. All

Ans.'3